

CHEM HELP *ASAP*

Organic Chemistry Problem Set

Naming Carbonyl Compounds

Instructions: The molecules below contain various types of carbonyl functional groups. Provide IUPAC names for these structures.

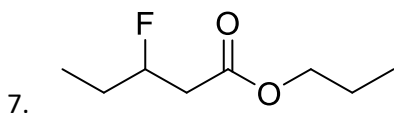
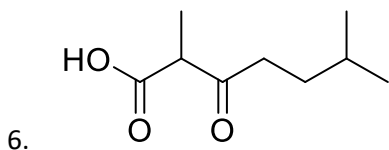
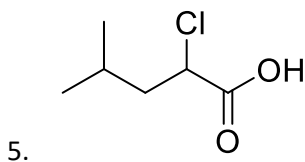
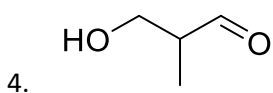
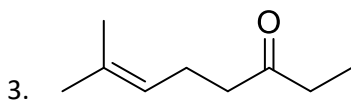
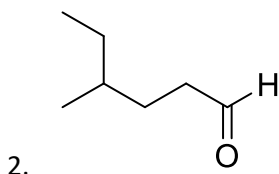
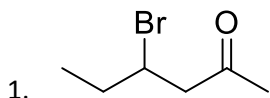
Suggested playlist:

<https://www.youtube.com/watch?v=64az5TxVD4w&list=PLlzSRqjN72jcnivR1C0tyWqipE4pG7TE6>

YouTube video of answered questions:

<https://youtu.be/IAyUGdKNFZI>

Questions:



8.

